

Year 4

Multiplicative Fluency 2

Week 11

Review... 41 to 50

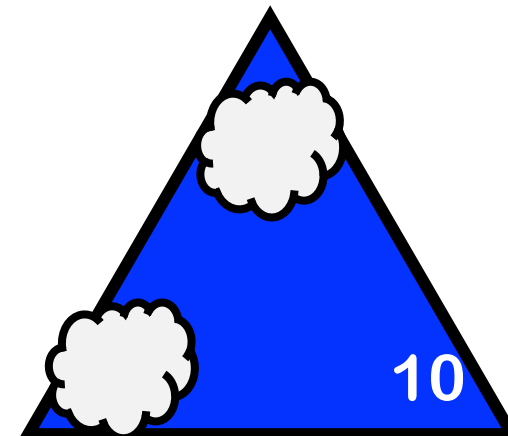

Which numbers?

1	2	3	4	5	6	7	8	9	10
11	12	13	14	15	16	17	18	19	20
21	22	23	24	25	26	27	28	29	30
31	32	33	34	35	36	37	38	39	40
41	42	43	44	45	46	47	48	49	50
51	52	53	54	55	56	57	58	59	60
61	62	63	64	65	66	67	68	69	70
71	72	73	74	75	76	77	78	79	80
81	82	83	84	85	86	87	88	89	90
91	92	93	94	95	96	97	98	99	100

Which early numbers are in times tables?

Which numbers are in the 2x table?

Which could these be?



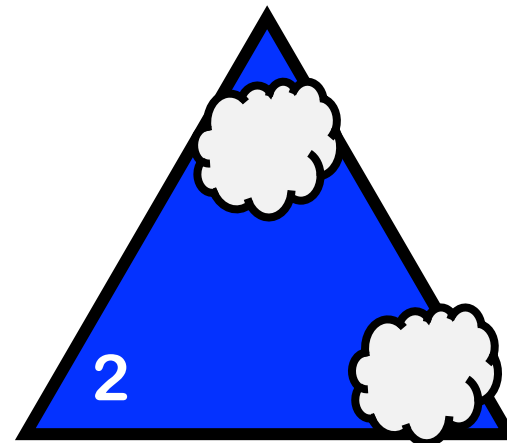

Numbers from 31 to 40

Which numbers are in times tables in the orange row?

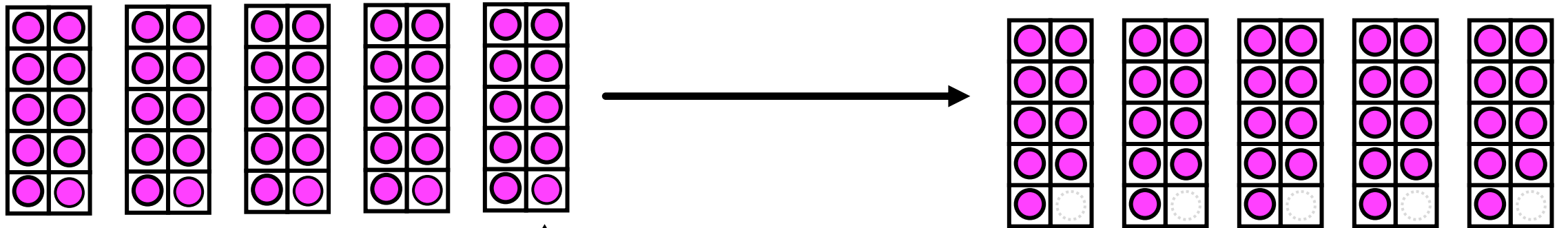

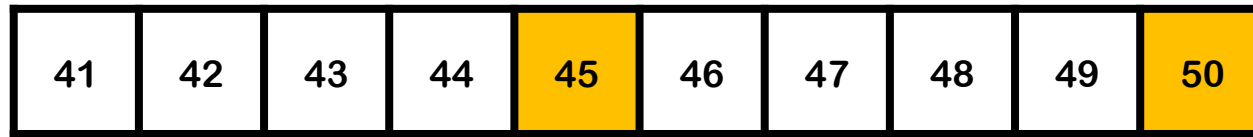
1	2	3	4	5	6	7	8	9	10
11	12	13	14	15	16	17	18	19	20
21	22	23	24	25	26	27	28	29	30
31	32	33	34	35	36	37	38	39	40
41	42	43	44	45	46	47	48	49	50
51	52	53	54	55	56	57	58	59	60
61	62	63	64	65	66	67	68	69	70
71	72	73	74	75	76	77	78	79	80
81	82	83	84	85	86	87	88	89	90
91	92	93	94	95	96	97	98	99	100

Can you remember facts for the yellow numbers?

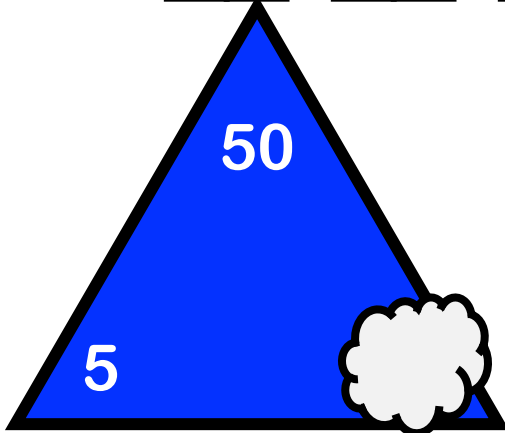
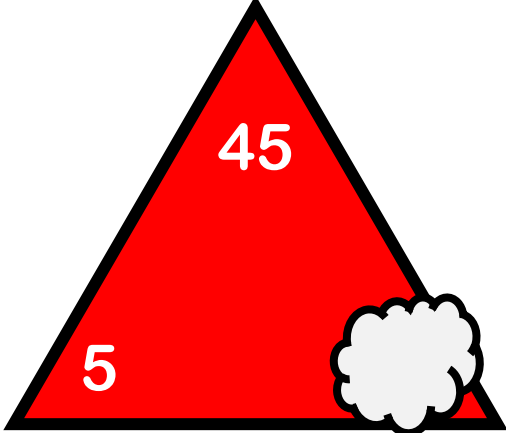
Which could these be?



Which could these NOT be?

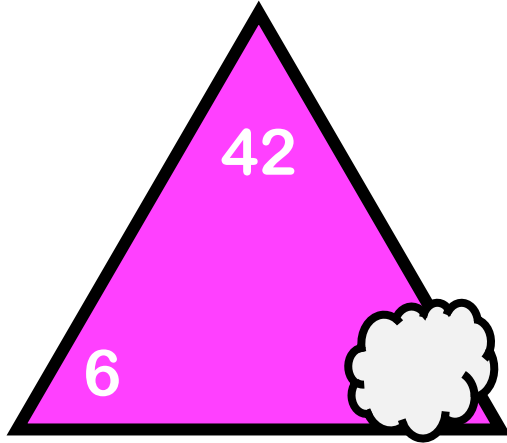


How are 45 and 50 related?

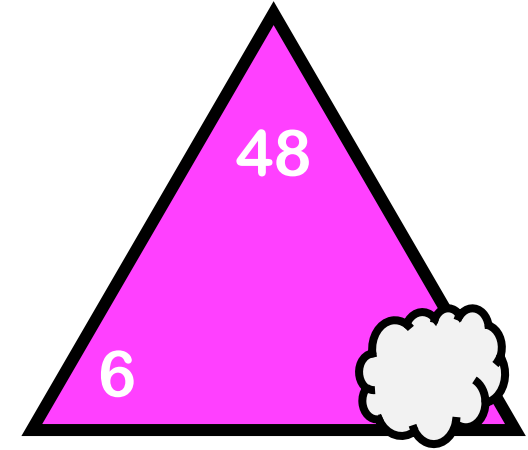



Say 2 multiplication and 2 division facts for each number

41	42	43	44	45	46	47	48	49	50
----	----	----	----	----	----	----	----	----	----

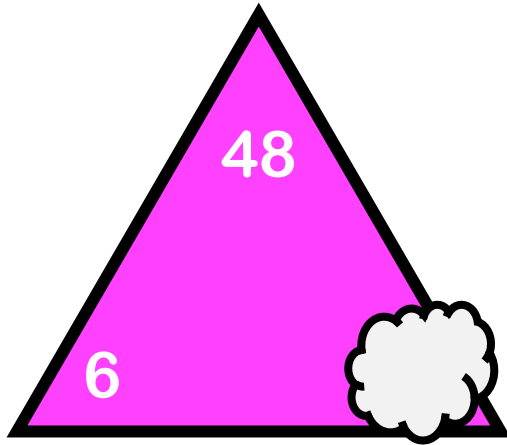


$$\begin{array}{l} \square \times \square = 42 \\ \square \times \square = 42 \\ 42 \div \square = \square \\ 42 \div \square = \square \end{array}$$



$$\begin{array}{l} \square \times \square = 48 \\ \square \times \square = 48 \\ 48 \div \square = \square \\ 48 \div \square = \square \end{array}$$

41	42	43	44	45	46	47	48	49	50
----	----	----	----	----	----	----	----	----	----



$$\begin{array}{l} \square \times \square = 48 \\ \square \times \square = 49 \\ 49 \div \square = \square \end{array}$$

