

Year 1

Additive Fluency 1

Week 6 – First review

Review so far

Notes for teachers in school or at home:

- Review the numbers 5,6,7,8 and all together.
- Rehearse counting
- Number bonds for addition and subtraction
- Use visuals and finger awareness



Number 5

Oh no!
The numbers have
been mixed up!

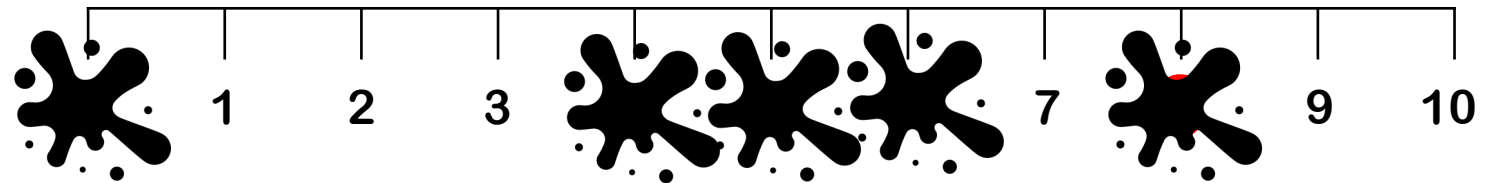
Can you put them
back in order?




Not again!

The paint has
spilled.



Where has 5 gone?



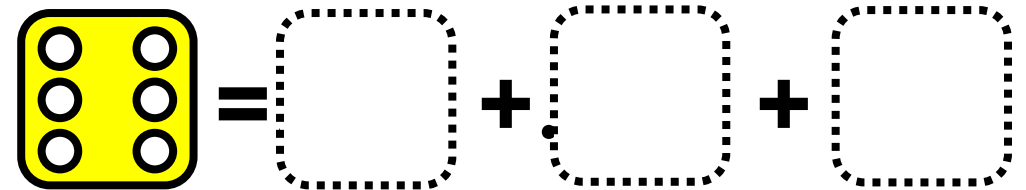
Number six



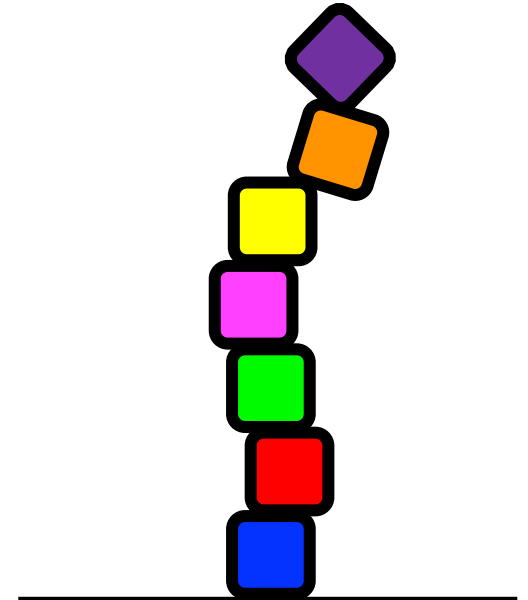
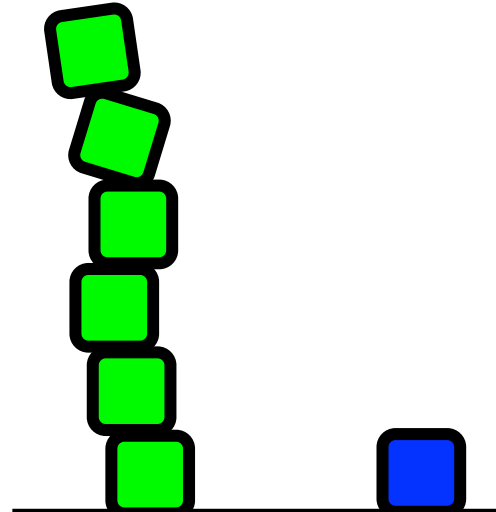
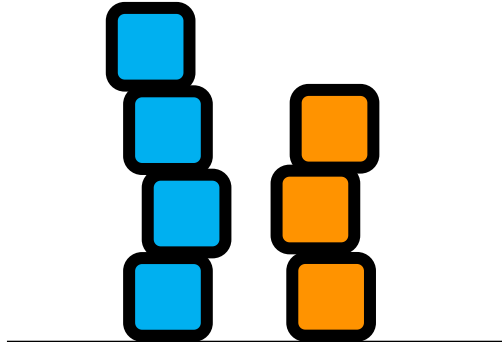
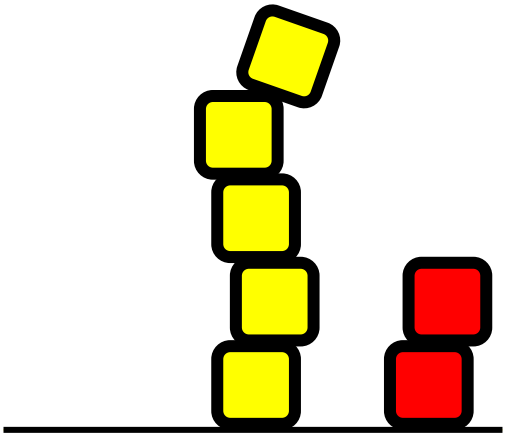
Roll 2 dice. Can you score
6 in total?



Roll 3 dice. Can you score
6 in total?



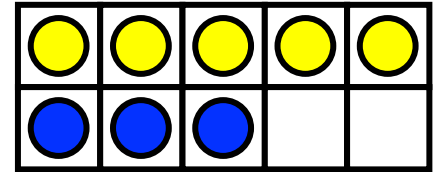

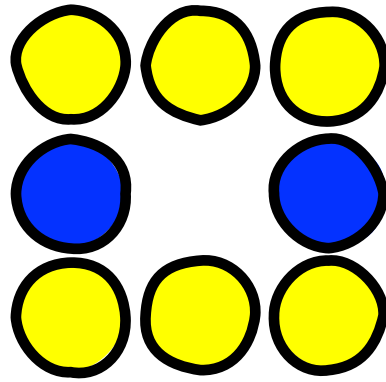
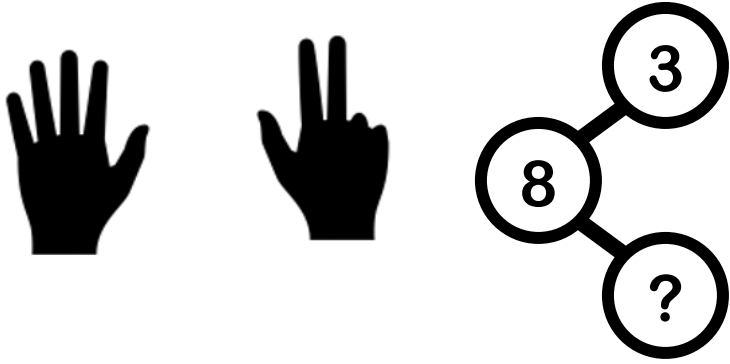
Seven!



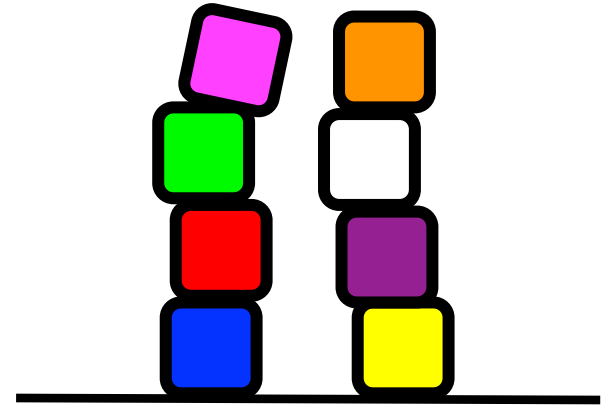
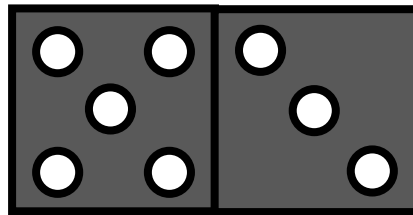
Make towers with 7
cubes.
How many in each
tower?

Make a tower of 7.
Will it balance?

Parts of 8



Look at all these way of making 8.



Use what you know...

$$8 = 4 + \heartsuit$$


$$7 = 3 + \bullet$$

$$6 = \star + 4$$

$$2 + 5 = \text{cloud}$$

$$3 + 2 = \blacklozenge$$

$$4 + \blacktriangledown = 5$$



Use what you know about
the numbers
5 6 7 and 8 to solve these



$$7 - 4 = \heartsuit$$

$$8 - 4 = \bullet$$

$$6 - \star = 4$$

$$5 - 4 = \text{cloud}$$

$$\blacklozenge - 3 = 4$$

$$8 - \blacktriangledown = 4$$